

Found of Alg **Classwork: Graphing and Solving Inequalities Part 2**

Name \_\_\_\_\_

Date \_\_\_\_\_

- Solve and graph the inequality.

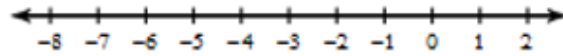
1.  $15 \leq a + 12$  \_\_\_\_\_

\_\_\_\_\_



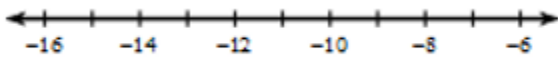
2.  $2m - 6 \geq -18$

\_\_\_\_\_



3.  $\frac{x}{2} + 16 < 10$

\_\_\_\_\_



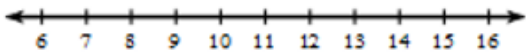
4.  $5(x - 2) \geq 30$

\_\_\_\_\_



5.  $6x - 7 > 5x + 6$

\_\_\_\_\_



6.  $8 - \frac{x}{2} \leq 12$

\_\_\_\_\_

