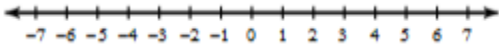
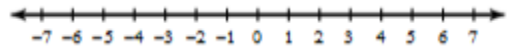


- Shade the graph for each inequality.

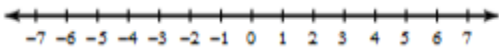
1. $n \leq 4$



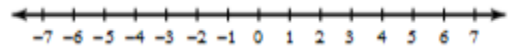
2. $x > -1$



3. $x \geq -5$

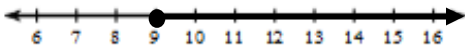


4. $n < 3$

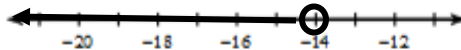


- Write an inequality for each graph.

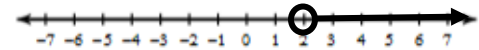
5. _____



6. _____

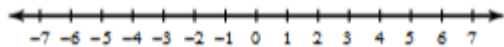


7. _____

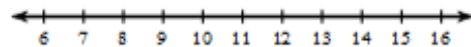


- Solve then graph. SHOW YOUR WORK.

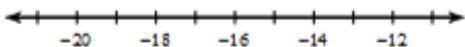
8. $x + 3 < 5$



9. $\frac{x}{4} \geq 3$



10. $-\frac{x}{2} > 7$



11. $3n < -15$

